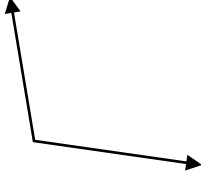


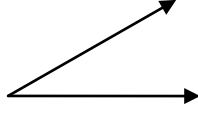
ADI SOYADI:

1. Aşağıdakilerden hangisi dik açıdır?

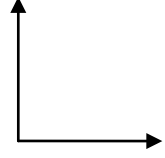
a.



b.

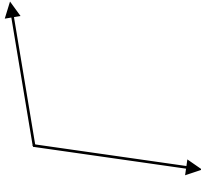


c.

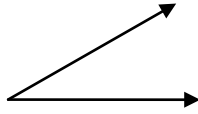


2. Aşağıdakilerden hangisi dar açıdır?

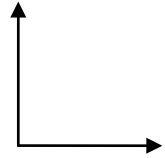
a.



b.

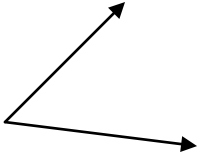


c.

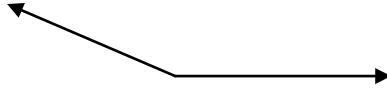


3. Aşağıdakilerden hangisi geniş açıdır?

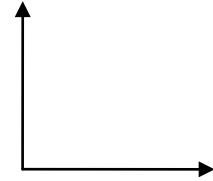
a.



b.



c.

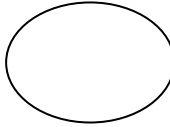


4. Aşağıdaki geometrik şekillerden hangisinin bütün açıları diktir?

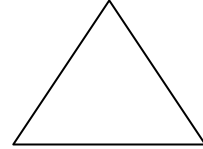
a.



b.

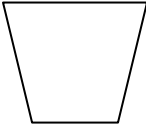


c.



5. Aşağıdaki geometrik şekillerden hangisinde dik açı vardır?

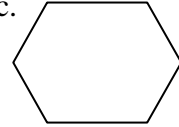
a.



b.

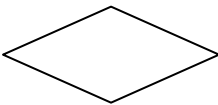


c.



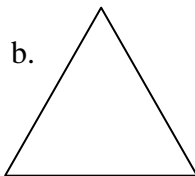
6. Aşağıdaki geometrik şekillerdeki dar açı sayısını noktalı yerlere yazınız.

a.



.....

b.



.....

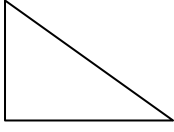
c.



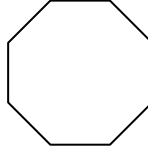
.....

7. Aşağıdaki geometrik şekillerden hangisinde geniş açı yoktur?

a.



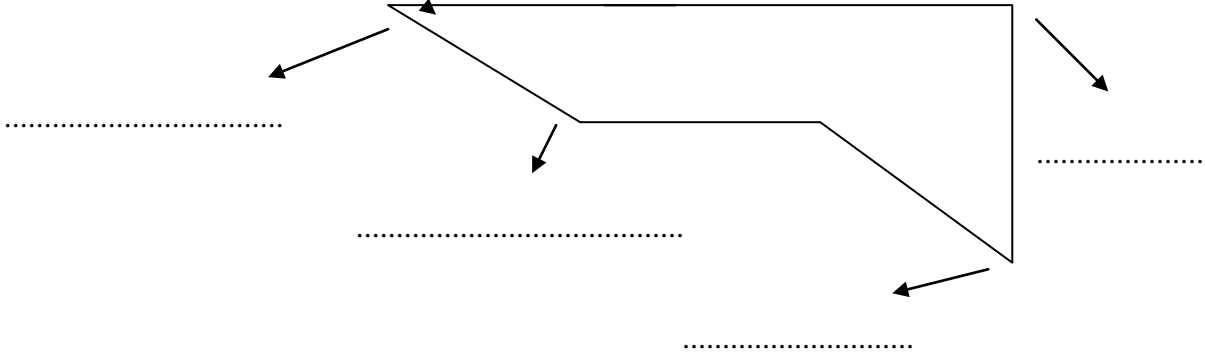
b.



c.

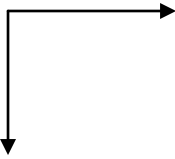


8. Aşağıdaki noktalı yerlere açı isimlerini yazınız.



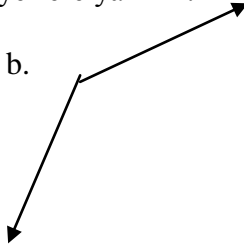
9. Aşağıdaki açıların isimlerini noktalı yerlere yazınız.

a.



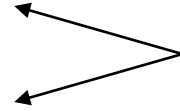
.....

b.



.....


c.





.....

10. Aşağıdaki geometrik şekillerden dik açısı olanları aya dik açısı olmayanları da güneşe ok çizerek götürünüz.

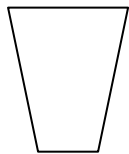
DİK AÇISI OLANLAR



DİK AÇISI OLMAYANLAR



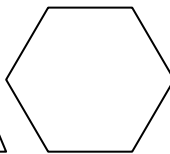
1



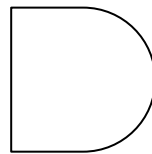
2



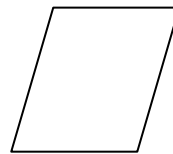
3



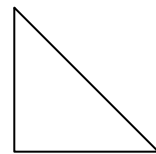
4



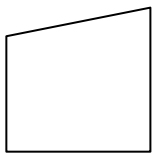
5



6



7



8